

Harmony, Inc. Music Reader 101 Test

Name & Date _____


Email _____

.....
Please read all instructions carefully!

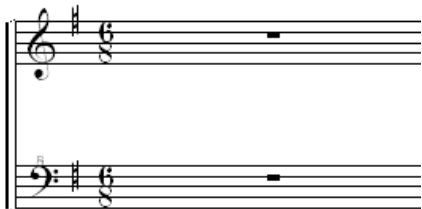
Complete all items to the right of each picture:



Key of _____ **Write keynote on both staves.**
Time signature meaning _____
Type of rhythm _____
(ex. Simple, compound, waltz, march, etc.)




Key of _____ **Write keynote on both staves.**
Time signature meaning _____
Type of rhythm _____



Key of _____ **Write keynote on both staves.**
Time signature meaning _____
Type of rhythm _____

.....
Write (label) as much as you can about the following four measures. Include things such as:

- * Names of the clefs
- * Time signature meaning
- * The key and the names of all the flats in this key
- * Names of all the notes and their duration
- * Name for symbols preceding some of the notes
- * Optional: Name any intervals or chords that you can.



Harmony, Inc. Music Reader 101 Test

Name & Date _____

Email _____

.....

Complete the questions below for the following example:

Tenor Lead

73 74 75

tak - in' a chance on love

Bari Bass

76 77 78

love on love

love on love

3
tak - ing a chance on

In barbershop song form, these measures are part of what section of the song? _____

What key is this written in? _____ **Circle all keynotes in all measures.**

What does the time signature mean? _____

Name the notes (from bottom up) for the 3rd chord in measure 73. _____

Name the notes (bottom up) for the chord on beat 3 of measure 75. _____

Name the notes (bottom up) for the 2nd chord in measure 76. _____

What is the time value (in beats) for the lead rest in measure 78? _____

What is the difference between a tie and a slur? _____

Which part(s) has a tie in measure 76? _____

How many beats do the first three bass notes in measure 75 represent? _____

What is this called? _____

Place an **X** on the keyboard keys below for every note in the lead line.

